



Measure and Estimate Liquid Volume Worksheet

Name: _____

Practice the below liquid volume activities together as a class.

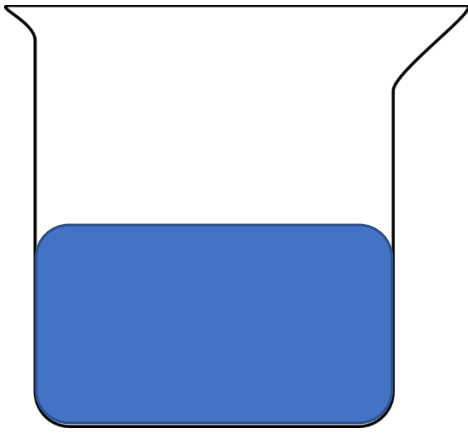


Color **1/4 cup** of the beaker above with a blue crayon to represent water. Label each line of measurement in cups ($1/4$, $1/2$, $3/4$, 1 cup). Practice measuring and pouring water up to **1/4 cup** in an actual beaker in class.

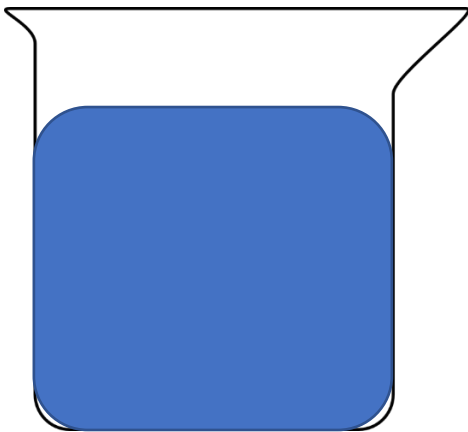


Color **3/4 cup** of the beaker above with a blue crayon to represent water. Label each line of measurement in cups ($1/4$, $1/2$, $3/4$, 1 cup). Practice measuring and pouring water up to **3/4 cup** in an actual beaker in class.

Practice estimating the liquid volume of water in the below beakers.



Estimate the liquid volume of water in the beaker above in cups.



Estimate the liquid volume of water in the beaker above in cups.
